

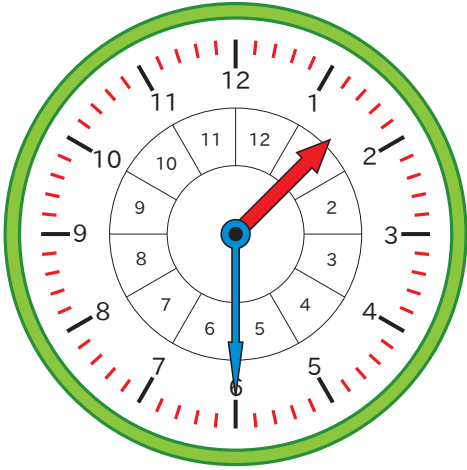
# 時計の読み方 5分単位の何時何分の時計の読み方

名前 \_\_\_\_\_

\_\_\_\_\_ 月 \_\_\_\_\_ 日

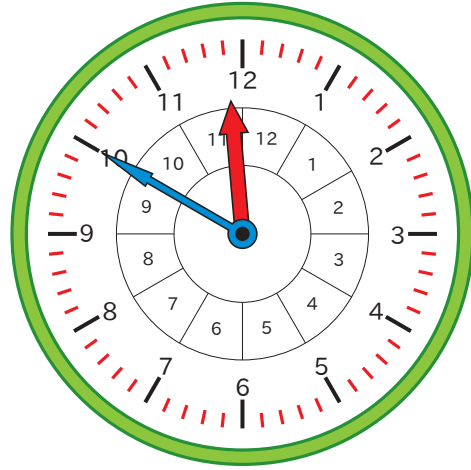
\_\_\_\_\_ 点

(1)



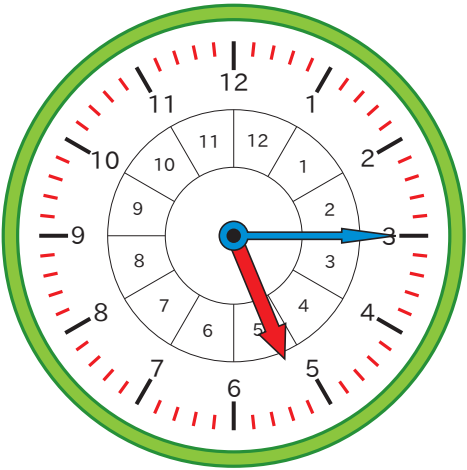
\_\_\_\_\_ 時 \_\_\_\_\_ 分

(2)



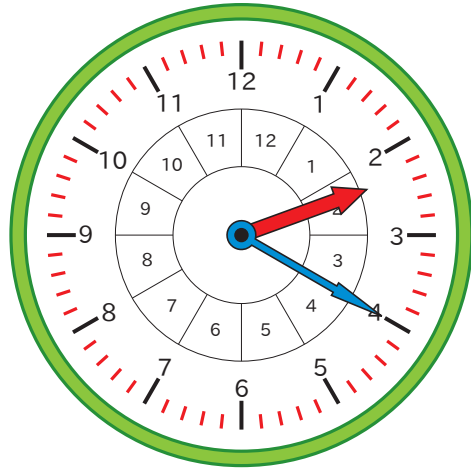
\_\_\_\_\_ 時 \_\_\_\_\_ 分

(3)



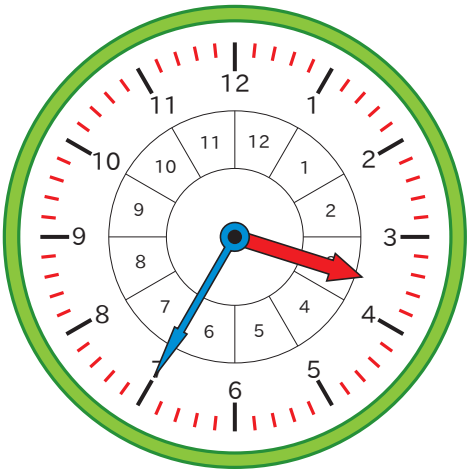
\_\_\_\_\_ 時 \_\_\_\_\_ 分

(4)



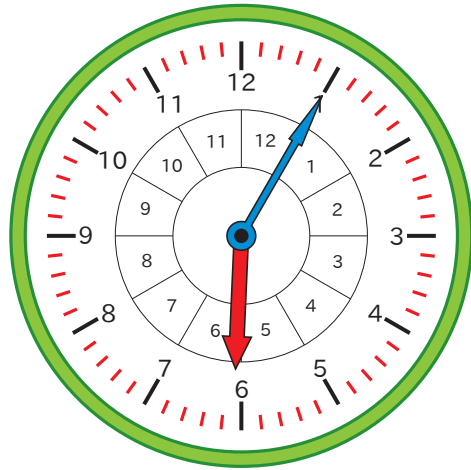
\_\_\_\_\_ 時 \_\_\_\_\_ 分

(5)



\_\_\_\_\_ 時 \_\_\_\_\_ 分

(6)



\_\_\_\_\_ 時 \_\_\_\_\_ 分

