

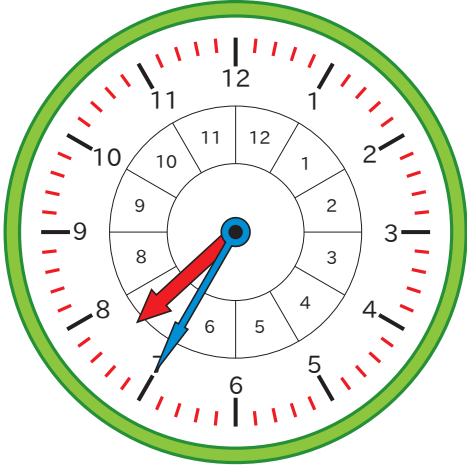
# 時計の読み方 5分単位の何時何分の時計の読み方

名前 \_\_\_\_\_

\_\_\_\_ 月 \_\_\_\_ 日

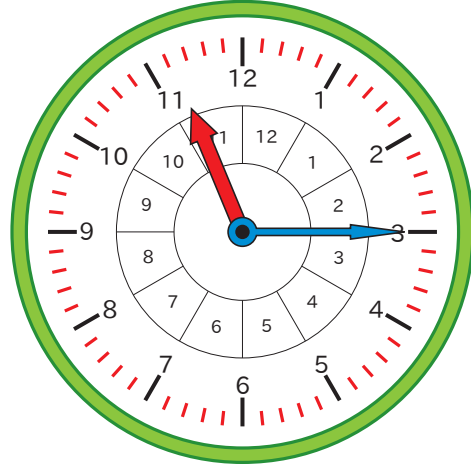
\_\_\_\_ 点

(1)



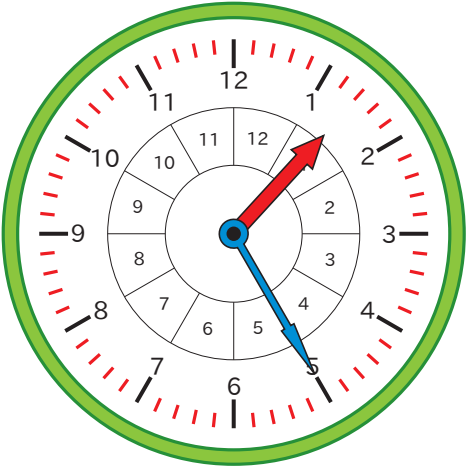
\_\_\_\_ 時 \_\_\_\_ 分

(2)



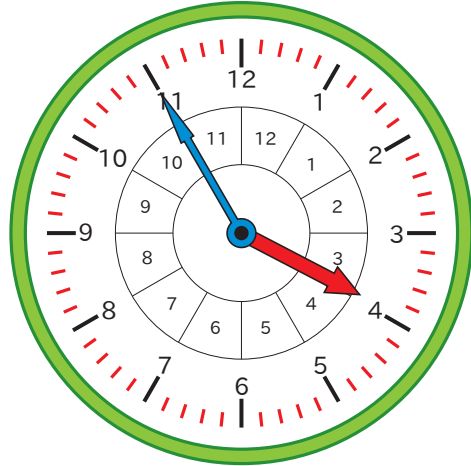
\_\_\_\_ 時 \_\_\_\_ 分

(3)



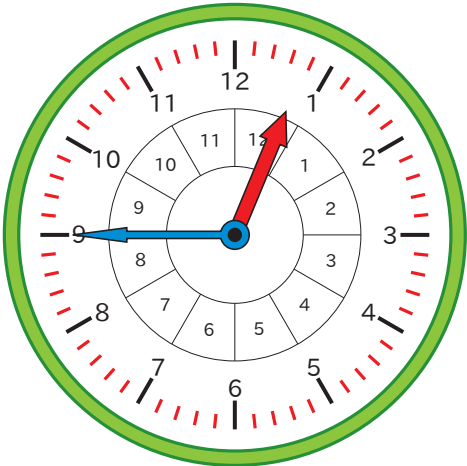
\_\_\_\_ 時 \_\_\_\_ 分

(4)



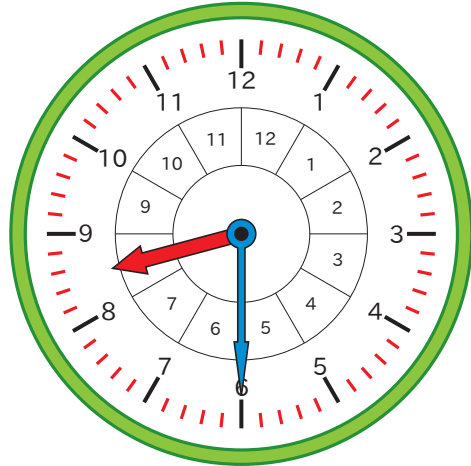
\_\_\_\_ 時 \_\_\_\_ 分

(5)



\_\_\_\_ 時 \_\_\_\_ 分

(6)



\_\_\_\_ 時 \_\_\_\_ 分

